

# Singapore Mathematical Society

Singapore Mathematical Olympiad (SMO) 2013

(Senior Section)

Tuesday, 4 June 2013

9:30 — 12:00

**Important:**

*Answer ALL 35 questions.*

*Enter your answers on the answer sheet provided.*

*For the multiple choice questions, enter your answer on the answer sheet by shading the bubble containing the letter (A, B, C, D or E) corresponding to the correct answer.*

*For the other short questions, write your answer on the answer sheet and shade the appropriate bubbles below your answer.*

*No steps are needed to justify your answers.*

*Each question carries 1 mark.*

*No calculators are allowed.*

**PLEASE DO NOT TURN OVER UNTIL YOU ARE TOLD TO DO SO.**

## Multiple Choice Questions

1. A shop sells two kinds of products  $A$  and  $B$ . One day, a salesman sold both  $A$  and  $B$  at the same price \$2100 to a customer. Suppose product  $A$  makes a profit of 20% but product  $B$  makes a loss of 20%. Then this deal

(A) make a profit of \$70;    (B) make a loss of \$70;    (C) make a profit of \$175;  
(D) make a loss of \$175;    (E) makes no profit or loss.

2. How many integer solutions does the equation  $(x^3 - x - 1)^{x+2013} = 1$  have?

(A) 0;    (B) 1;    (C) 2;    (D) 3;    (E) More than 3.

3. In the  $xy$ -plane, which of the following is the reflection of the graph of

$$y = \frac{1+x}{1+x^2}$$

about the line  $y = 2x$ ?

(A)  $x = \frac{1+y}{1+y^2}$ ;    (B)  $x = \frac{-1+y}{1+y^2}$ ;    (C)  $x = -\frac{1+y}{1+y^2}$ ;    (D)  $x = \frac{1-y}{1+y^2}$ ;  
(E) None of the above.

4. Let  $n$  be a positive integer. Find the number of possible remainders when

$$2013^n - 1803^n - 1781^n + 1774^n$$

is divided by 203.

(A) 1;    (B) 2;    (C) 3;    (D) 4;    (E) More than 4.

5. Find the number of integers  $n$  such that the equation

$$xy^2 + y^2 - x - y = n$$

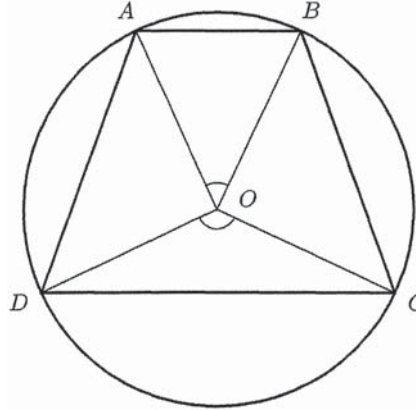
has an infinite number of integer solutions  $(x, y)$ .

(A) 0;    (B) 1;    (C) 2;    (D) 3;    (E) More than 3.

6. If  $0 < \theta < \frac{\pi}{4}$  is such that  $\operatorname{cosec} \theta - \sec \theta = \frac{\sqrt{13}}{6}$ , then  $\cot \theta - \tan \theta$  equals

(A)  $\frac{\sqrt{13}}{6}$ ;    (B)  $\frac{\sqrt{12}}{6}$ ;    (C)  $\frac{\sqrt{5}}{6}$ ;    (D)  $\frac{13}{6}$ ;    (E)  $\frac{5}{6}$ .

7.  $ABCD$  is a trapezium inscribed in a circle centred at  $O$ . It is given that  $AB \parallel CD$ ,  $\angle COD = 3\angle AOB$ , and  $\frac{AB}{CD} = \frac{2}{5}$ .

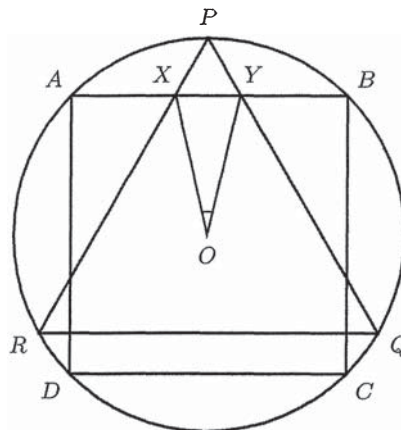


Find the ratio

$$\frac{\text{area of } \triangle BOC}{\text{area of } \triangle AOB}$$

- (A)  $\frac{3}{2}$ ; (B)  $\frac{7}{4}$ ; (C)  $\frac{\sqrt{3}}{\sqrt{2}}$ ; (D)  $\frac{\sqrt{5}}{2}$ ; (E)  $\frac{\sqrt{7}}{\sqrt{2}}$ .

8. A square  $ABCD$  and an equilateral triangle  $PQR$  are inscribed in a circle centred at  $O$  in such a way that  $AB \parallel QR$ . The sides  $PQ$  and  $PR$  of the triangle meet the side  $AB$  of the square at  $X$  and  $Y$  respectively.



The value of  $\tan \angle XOY$  is

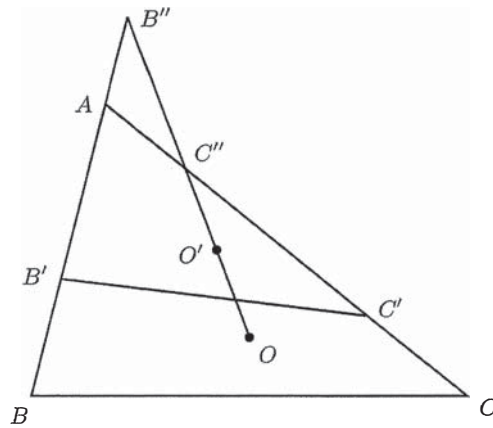
- (A)  $\frac{1}{\sqrt{3}}$ ; (B) 1; (C)  $\frac{\sqrt{6} - \sqrt{3}}{\sqrt{2}}$ ; (D)  $\frac{2\sqrt{2} - 2}{\sqrt{3}}$ ; (E)  $\sqrt{3}$ .

9. Two people go to the same swimming pool between 2:00p.m. and 5:00p.m. at random time and each swims for one hour. What is the chance that they meet?

- (A)  $\frac{1}{9}$ ;    (B)  $\frac{2}{9}$ ;    (C)  $\frac{1}{3}$ ;    (D)  $\frac{4}{9}$ ;    (E)  $\frac{5}{9}$ .

10. Given a triangle  $\triangle ABC$ , let  $B'$  and  $C'$  be points on the sides  $AB$  and  $AC$  such that  $BB' = CC'$ . Let  $O$  and  $O'$  be the circumcentres (i.e., the centre of the circumscribed circle) of  $\triangle ABC$  and  $\triangle AB'C'$ , respectively. Suppose  $OO'$  intersect lines  $AB'$  and  $AC'$  at  $B''$  and  $C''$ , respectively. If  $AB = \frac{1}{2}AC$ , then

- (A)  $AB'' < \frac{1}{2}AC''$ ;    (B)  $AB'' = \frac{1}{2}AC''$ ;    (C)  $\frac{1}{2}AC'' < AB'' < AC''$ ;  
 (D)  $AB'' = AC''$ ;    (E)  $AB'' > AC''$ .



### Short Questions

11. Suppose a right-angled triangle is inscribed in a circle of radius 100. Let  $\alpha$  and  $\beta$  be its acute angles. If  $\tan \alpha = 4 \tan \beta$ , find the area of the triangle.

12. Let  $f(x) = \frac{1+10x}{10-100x}$ . Set  $f^n = \overbrace{f \circ f \circ \dots \circ f}^{n \text{ terms}}$ . Find the value of

$$f\left(\frac{1}{2}\right) + f^2\left(\frac{1}{2}\right) + f^3\left(\frac{1}{2}\right) + \dots + f^{6000}\left(\frac{1}{2}\right).$$

13. Let  $AB$  and  $CD$  be perpendicular segments intersecting at point  $P$ . Suppose that  $AP = 2$ ,  $BP = 3$  and  $CP = 1$ . If all the points  $A, B, C, D$  lie on a circle, find the length of  $DP$ .

14. On the  $xy$ -plane, let  $S$  denote the region consisting of all points  $(x, y)$  for which

$$\left|x + \frac{1}{2}y\right| \leq 10, \quad |x| \leq 10 \quad \text{and} \quad |y| \leq 10.$$

The largest circle centred at  $(0, 0)$  that can be fitted in the region  $S$  has area  $k\pi$ . Find the value of  $k$ .

15. Given that  $\sqrt[3]{17 - \frac{27}{4}\sqrt{6}}$  and  $\sqrt[3]{17 + \frac{27}{4}\sqrt{6}}$  are the roots of the equation

$$x^2 - ax + b = 0,$$

find the value of  $ab$ .

16. Find the number of integers between 1 and 2013 with the property that the sum of its digits equals 9.
17. Let  $p(x)$  be a polynomial with integer coefficients such that  $p(m) - p(n)$  divides  $m^2 - n^2$  for all integers  $m$  and  $n$ . If  $p(0) = 1$  and  $p(1) = 2$ , find the largest possible value of  $p(100)$ .
18. Find the number of positive integer pairs  $(a, b)$  satisfying  $a^2 + b^2 < 2013$  and  $a^2b \mid (b^3 - a^3)$ .

19. Let  $f$  and  $g$  be functions such that for all real numbers  $x$  and  $y$ ,

$$g(f(x + y)) = f(x) + (x + y)g(y).$$

Find the value of  $g(0) + g(1) + \dots + g(2013)$ .

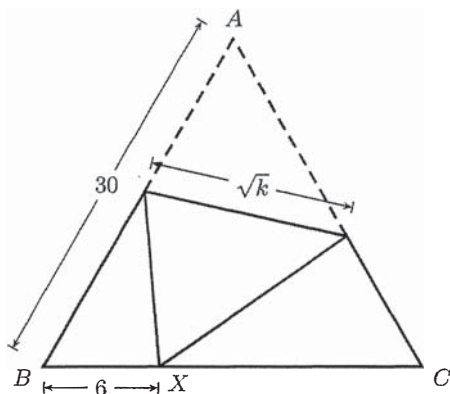
20. Each chocolate costs 1 dollar, each licorice stick costs 50 cents and each lolly costs 40 cents. How many different combinations of these three items cost a total of 10 dollars?

21. Let  $A = \{1, 2, 3, 4, 5, 6\}$ . Find the number of distinct functions  $f : A \rightarrow A$  such that  $f(f(f(n))) = n$  for all  $n \in A$ .

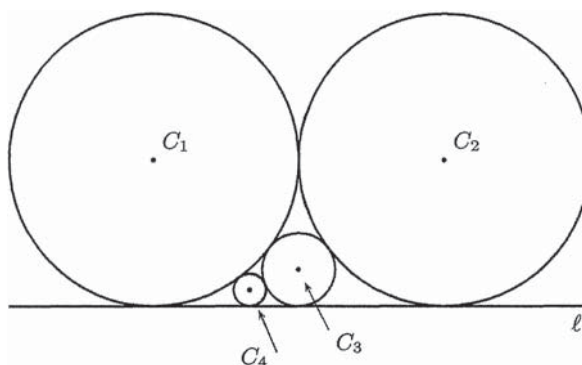
22. Find the number of triangles whose sides are formed by the sides and the diagonals of a regular heptagon (7-sided polygon). (Note: The vertices of triangles need not be the vertices of the heptagon.)

23. Six seats are arranged in a circular table. Each seat is to be painted in red, blue or green such that any two adjacent seats have different colours. How many ways are there to paint the seats?

24.  $\triangle ABC$  is an equilateral triangle of side length 30. Fold the triangle so that  $A$  touches a point  $X$  on  $BC$ . If  $BX = 6$ , find the value of  $k$ , where  $\sqrt{k}$  is the length of the crease obtained from folding.



25. As shown in the figure below, circles  $C_1$  and  $C_2$  of radius 360 are tangent to each other, and both tangent to straight line  $\ell$ . If circle  $C_3$  is tangent to  $C_1$ ,  $C_2$  and  $\ell$ , and circle  $C_4$  is tangent to  $C_1$ ,  $C_3$  and  $\ell$ , find the radius of  $C_4$ .



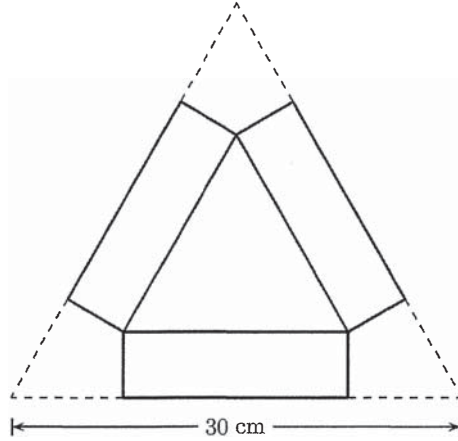
26. Set  $\{x\} = x - [x]$ , where  $[x]$  denotes the largest integer less than or equal to  $x$ . Find the number of real solutions to the equation

$$\{x\} + \{x^2\} = 1, \quad |x| \leq 10.$$

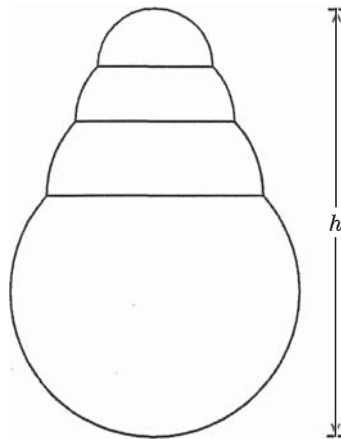
27. Find the value of  $\left\lfloor \left( \frac{3 + \sqrt{17}}{2} \right)^6 \right\rfloor$ .

28. A regular dodecagon (12-sided polygon) is inscribed in a circle of radius 10. Find its area.

29. A triangular box is to be cut from an equilateral triangle of length 30 cm. Find the largest possible volume of the box (in  $\text{cm}^3$ ).



30. A hemisphere is placed on a sphere of radius 100 cm. The second hemisphere is placed on the first one, and the third hemisphere is placed on the second one (as shown below). Find the maximum height of the tower (in cm).

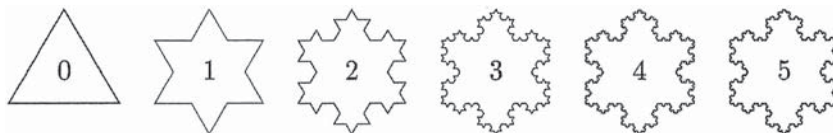


31. Let  $x, y, z$  be real numbers such that

$$x + y + z = 1 \quad \text{and} \quad x^2 + y^2 + z^2 = 1.$$

Let  $m$  denote the minimum value of  $x^3 + y^3 + z^3$ . Find  $9m$ .

32. Given an equilateral triangle of side 10, divide each side into three equal parts, construct an equilateral triangle on the middle part, and then delete the middle part. Repeat this step for each side of the resulting polygon. Find  $S^2$ , where  $S$  is the area of region obtained by repeating this procedure infinitely many times.



33. Suppose

$$\frac{1}{2013^{1000}} = a_1 + \frac{a_2}{2!} + \frac{a_3}{3!} + \cdots + \frac{a_n}{n!},$$

where  $n$  is a positive integer,  $a_1, \dots, a_n$  are nonnegative integers such that  $a_k < k$  for  $k = 2, \dots, n$  and  $a_n > 0$ . Find the value of  $n$ .

34. Let  $M$  be a positive integer. It is known that whenever  $|ax^2 + bx + c| \leq 1$  for all  $|x| \leq 1$ , then  $|2ax + b| \leq M$  for all  $|x| \leq 1$ . Find the smallest possible value of  $M$ .
35. Consider integers  $\{1, 2, \dots, 10\}$ . A particle is initially at 1. It moves to an adjacent integer in the next step. What is the expected number of steps it will take to reach 10 for the first time?